

Name : _____

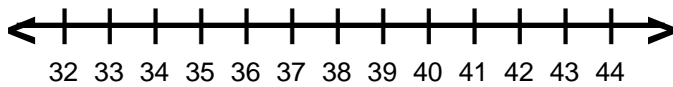
Score : _____

Teacher : _____

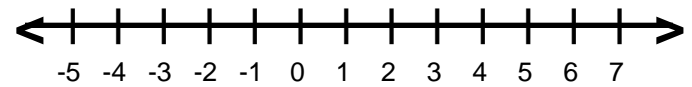
Date : _____

Solve and Graph the Inequalities

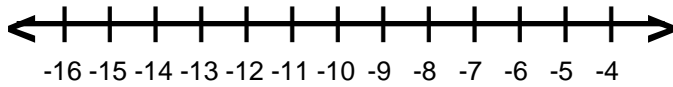
1) $6 \geq \frac{z}{6}$



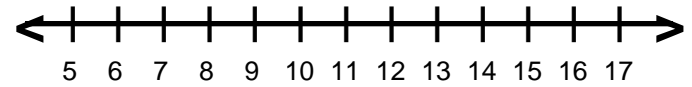
6) $-35 > -7h$



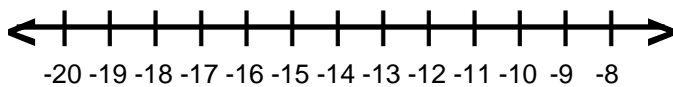
2) $-7 \leq \frac{x}{2}$



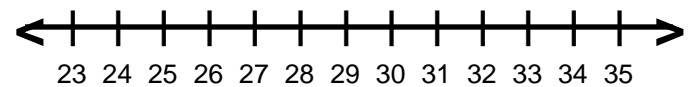
7) $14 > 2d$



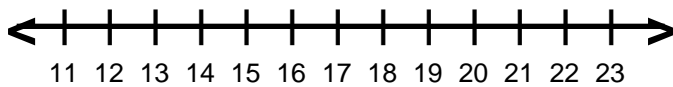
3) $\frac{g}{3} < -5$



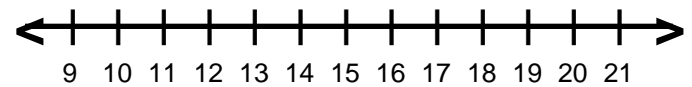
8) $6 \geq \frac{b}{5}$



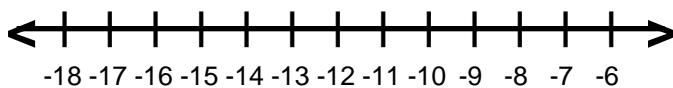
4) $\frac{r}{2} < 7$



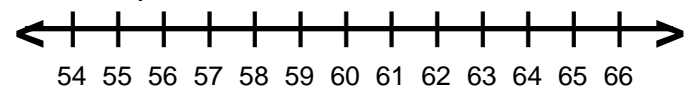
9) $-4a < -52$



5) $-3s > 36$



10) $\frac{q}{7} \leq 8$



Name : _____

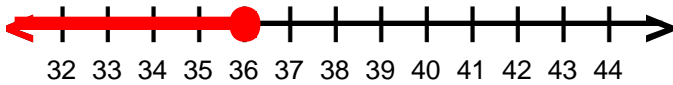
Score : _____

Teacher : _____

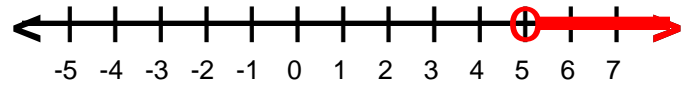
Date : _____

Solve and Graph the Inequalities

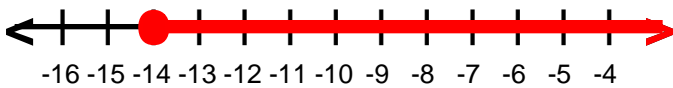
1) $z \leq 36$



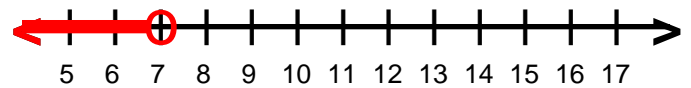
6) $h > 5$



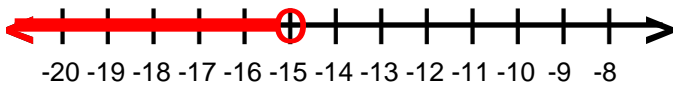
2) $x \geq -14$



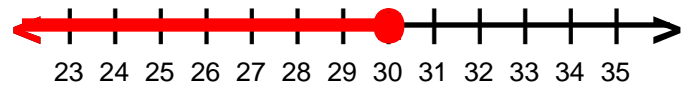
7) $d < 7$



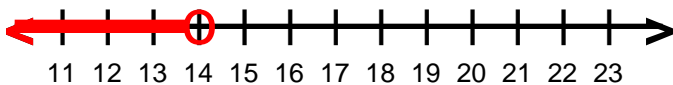
3) $g < -15$



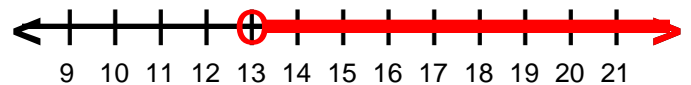
8) $b \leq 30$



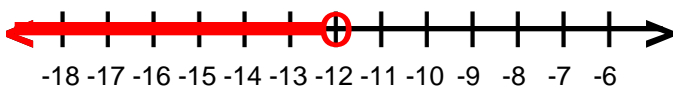
4) $r < 14$



9) $a > 13$



5) $s < -12$



10) $q \leq 56$

